

DIVIDE BY 10



GET READY



1) Complete the calculations

$$7 \times 10 =$$

$$4 \times 10 =$$


$$10 \times 9 =$$

$$10 \times 11 =$$

2) Circle the multiples of 10

12      120      55      80      10      41      14

3) Here is an array.



How many groups of 10 are there?

1) Complete the calculations

$$7 \times 10 = 70$$

$$4 \times 10 = 40$$

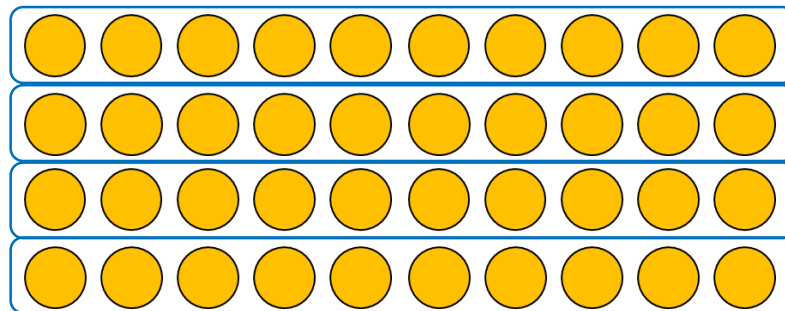
$$10 \times 9 = 90$$

$$10 \times 11 = 110$$

2) Circle the multiples of 10

12      120      55      80      10      41      14

3) Here is an array.



How many groups of 10 are there?

LET'S LEARN



Here are 20 flowers.



Have a  
think



We can share the flowers between 10 pots.




We can group the flowers into pots of 10

Here are 20 flowers.



The flowers are shared equally between 10 pots.



There are **2** flowers in each pot.

$$20 \div 10 = 2$$

Here are 20 flowers.



The flowers are grouped into pots of 10



There are **2** pots of 10

$$20 \div 10 = 2$$



$$10 \div 10 = 1$$

[illegible]

$$20 \div 10 = 2$$

[illegible]

$$30 \div 10 = 3$$

[illegible]

$$40 \div 10 = 4$$

[illegible]

$$1 \times 10 = 10$$

$$10 \div 10 = 1$$

$$2 \times 10 = 20$$

$$20 \div 10 = 2$$

$$3 \times 10 = 30$$

$$30 \div 10 = 3$$

$$4 \times 10 = 40$$

$$40 \div 10 = 4$$

$$5 \times 10 = 50$$

$$50 \div 10 = 5$$

$$6 \times 10 = 60$$

$$60 \div 10 = 6$$

$$7 \times 10 = 70$$

$$70 \div 10 = 7$$

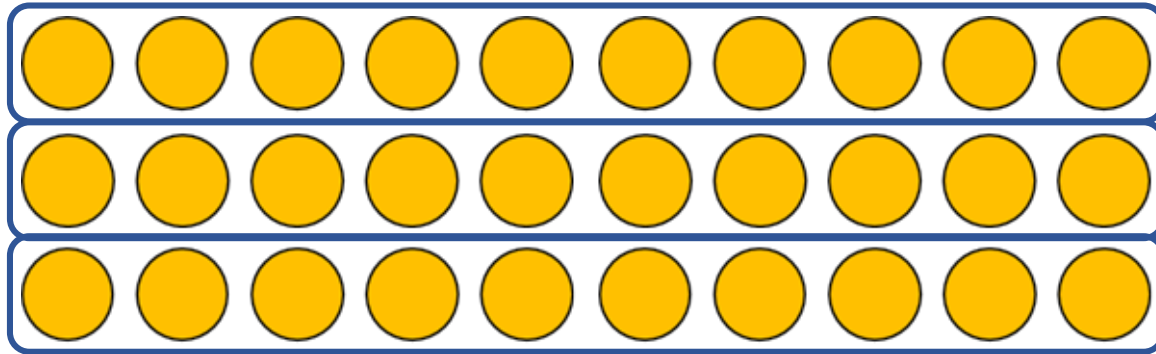
$$8 \times 10 = 80$$

$$80 \div 10 = 8$$

Have a think



Use the array to complete the calculations



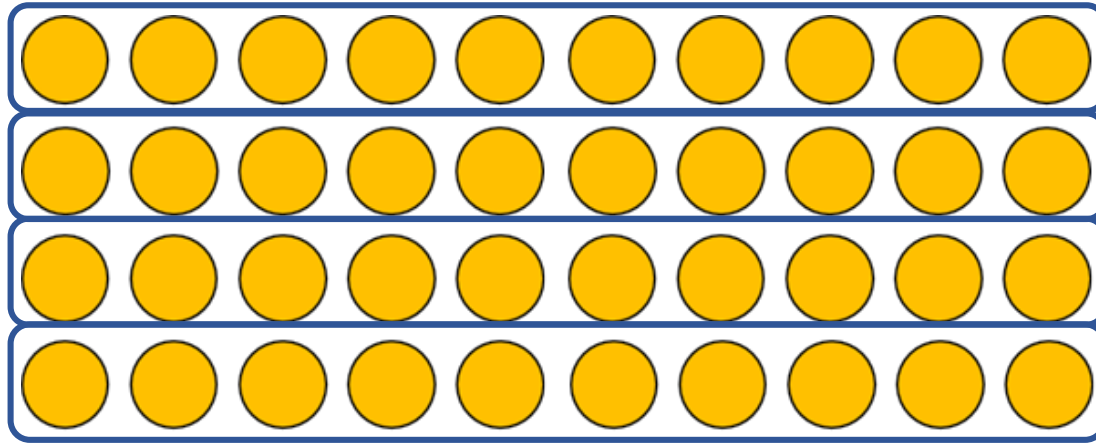
$$\boxed{3} \times \boxed{10} = \boxed{30}$$

$$\boxed{30} \div \boxed{10} = \boxed{3}$$

$$\boxed{10} \times \boxed{3} = \boxed{30}$$

$$\boxed{30} \div \boxed{3} = \boxed{10}$$

Use the array to complete the calculations



Have a  
think

$$\boxed{4} \times \boxed{10} = \boxed{40}$$

$$\boxed{40} \div \boxed{10} = \boxed{4}$$

$$\boxed{10} \times \boxed{4} = \boxed{40}$$

$$\boxed{40} \div \boxed{4} = \boxed{10}$$

Alex buys 10 rolls.



Have a think



She pays with a £1 coin and gets 10p change.

10 rolls cost 90p

$$90 \div 10 = 9$$


Each roll costs 9p

Whitney buys 2 rolls.

How much does Whitney spend?

$$2 \times 9 = 18$$

Whitney spends 18p





YOUR TURN

Have a go at the  
questions on the  
worksheet

